

55 minutes

# Mathematics Paper 2

## Stage 8

Name .....

Additional materials: Ruler  
Calculator  
Tracing paper  
Geometrical instruments

### READ THESE INSTRUCTIONS FIRST

Answer **all** questions in the spaces provided on the question paper.

You should show all your working on the question paper.

The number of marks is given in brackets [ ] at the end of each question or part question.

The total number of marks for this paper is 45.

For Teacher's Use	
Page	Mark
1	
2	
3	
4	
5	
6	
7	
8	
9	
10	
11	
12	
13	
14	
<b>Total</b>	

1 Write these numbers in order starting with the smallest.

1.5      1.39      1.070      1.3      1.24

..... [1]  
smallest ..... largest

2 Write the number 3.7452 correct to 2 decimal places.

..... [1]

3 Hussein says that the lowest common multiple of 6 and 4 is the same as the highest common factor of 36 and 24

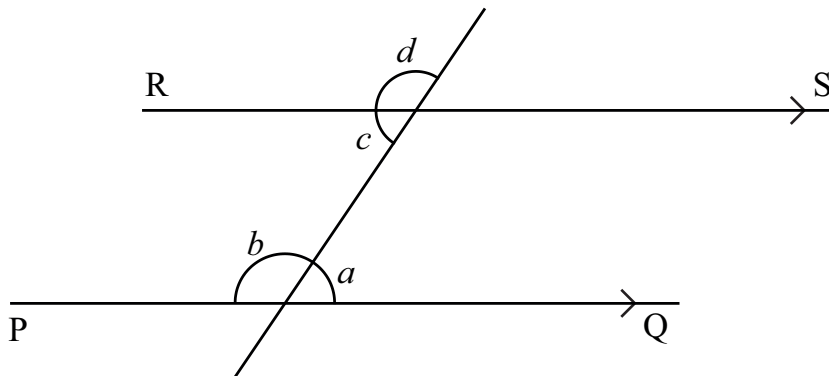
Is Hussein correct? Yes/No  
Explain your answer.

Because ..... [2]  
.....

4 A biased dice is thrown.  
The probability that it will land on a 6 is 0.8

What is the probability that it will not land on a 6?  
..... [1]

5 Look at the diagram.



Lines PQ and RS are parallel.

Choose from these words to complete the sentences.

**opposite    alternate    supplementary    corresponding    complementary**

(a) Angles  $b$  and  $d$  are ..... [1]

(b) Angles  $a$  and  $c$  are ..... [1]

6 \$44 is shared between David, Jo and Mary in the ratio 2 : 3 : 5

How much does each receive?

David \$ .....

Jo \$ .....

Mary \$ ..... [2]

- 7 (a) Pens cost 36 cents each.  
Pencils cost 12 cents each.

(i) Write an expression for the cost of  $y$  pens.

..... cents [1]

(ii) Complete the formula for working out the total cost ( $C$ ) of  $y$  pens and  $z$  pencils.

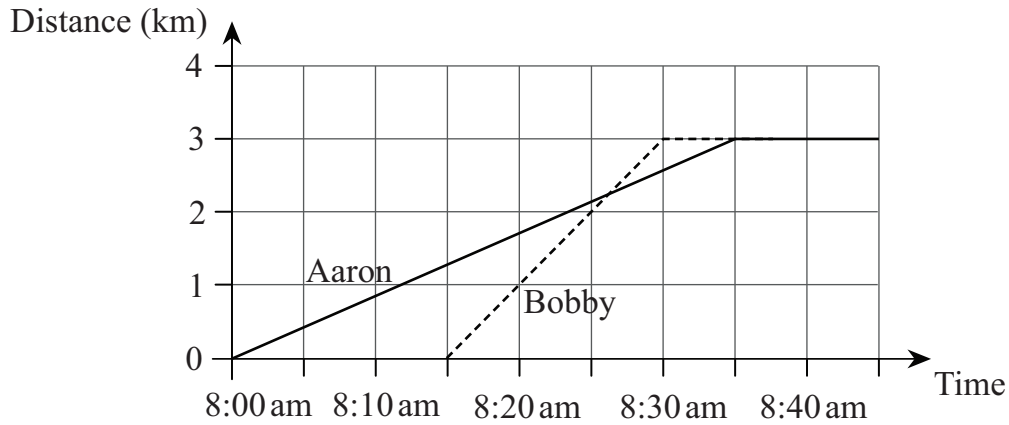
$C =$  ..... cents [1]

(b) The formula for the total cost ( $C$ ) of  $q$  rulers and  $s$  erasers is  $C = 40q + 15s$

Work out the total cost of 7 rulers and 4 erasers.

..... cents [1]

- 8 Aaron and Bobby are brothers.  
They go to the same school.  
Aaron leaves home at 8:00 am and walks to school.  
Bobby leaves home at 8:15 am and cycles to school.  
Bobby arrives at 8:30 am.  
The graph shows their journeys.



- (a) At what time did Aaron arrive at school?

..... [1]

- (b) How far is the school from the brothers' home?

..... km [1]

- (c) At what time does Bobby pass Aaron?

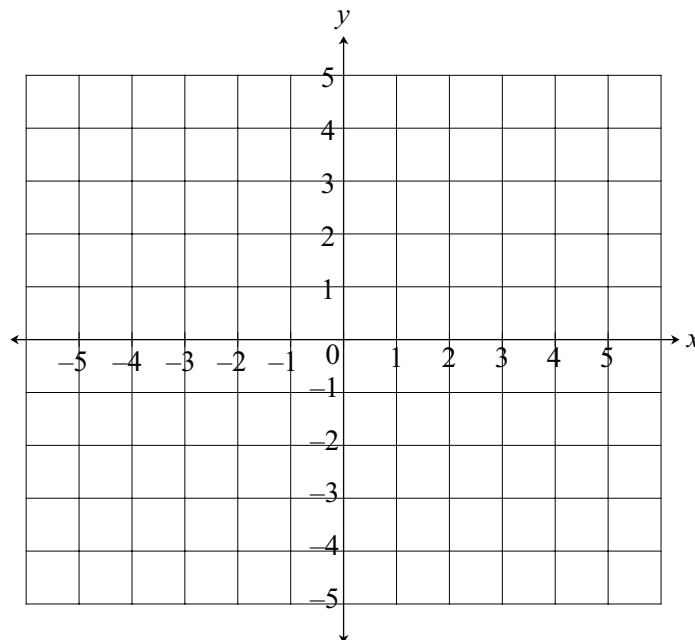
..... [1]

- 9 (a) Complete the table of values for  $y = 2x - 3$

$x$	-1	0	1	2	3
$y$		-3		1	

[1]

- (b) Plot the points on the grid and draw the line  $y = 2x - 3$



[1]

- (c) Is the point with coordinates  $(15, 29)$  on the line  $y = 2x - 3$ ?  
Explain your answer.

Yes/No because .....

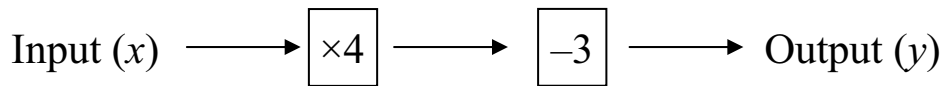
..... [1]

10 Write 6600 as a product of its prime factors.

For  
Teacher's  
Use

..... [2]

11 A mapping multiplies the input by 4 and then subtracts 3  
When the input is  $x$  the output is  $y$ .



(a) Write an expression for  $y$  using  $x$ .

$y =$  ..... [1]

(b) Work out the value of  $x$  when  $y = 31$

$x =$  ..... [1]

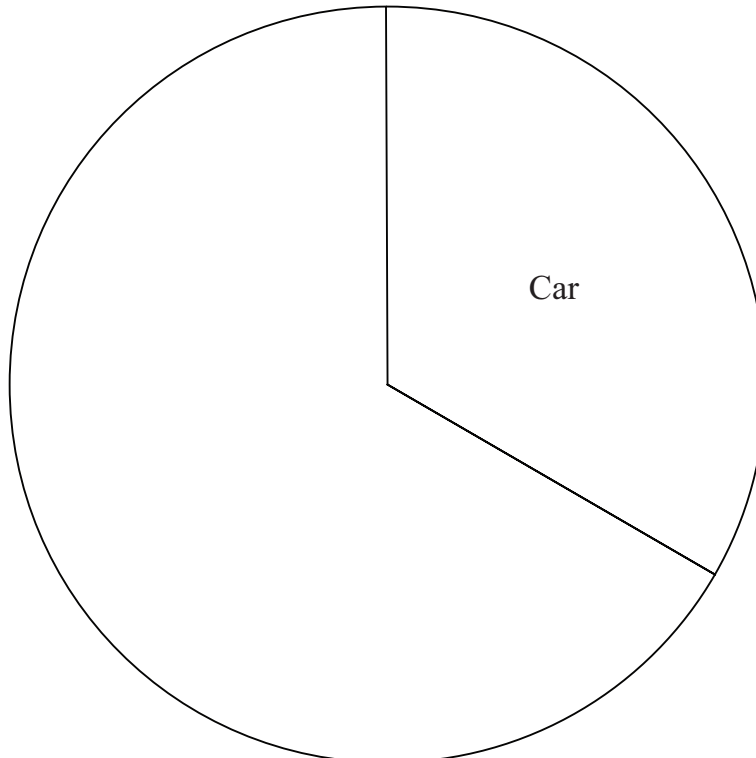
- 12 The table shows how the students in a class travel to school.  
A pie chart can be drawn to show this information.

(a) Complete the table to show the angles needed in a pie chart.

Method of travel	Frequency	Angle in pie chart
Car	10	$120^\circ$
Walk	9	
Bus	8	
Cycle	3	$36^\circ$
Total	30	

[1]

(b) Complete and label the pie chart.



[2]



13 Calculate  $\frac{3}{8}$  of 27

Give your answer as a fraction.

..... [1]

14 Here are five calculations.

$$56 \div 3$$

$$170 \div 9$$

$$113 \div 6$$

$$131 \div 7$$

$$93 \div 5$$

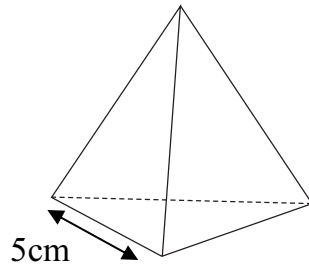
Tick (✓) the **two** calculations that give the same answer when rounded to 1 decimal place.

[1]

For  
Teacher's  
Use

- 15** A regular tetrahedron has edges of length 5 cm.

Use a ruler and a pair of compasses to accurately draw its net.



NOT TO  
SCALE

For  
Teacher's  
Use

[2]

- 16** A new car costs \$14 000  
Every year it loses 18% of its value.

How much is the car worth after 2 years?

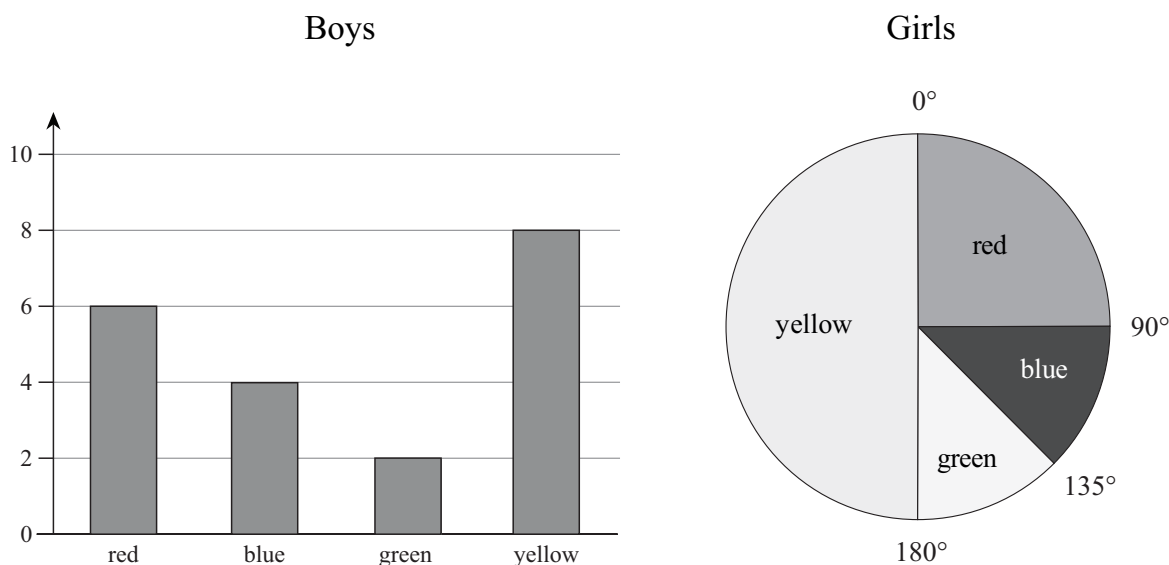
\$ ..... [2]

17 Sally says  $\frac{3}{4} < \frac{2}{3}$

Explain why Sally is wrong.

.....  
 ..... [1]

18 Some students were asked to choose their favourite colour from red, blue, green and yellow.  
 The bar chart and pie chart show the results.



The same number of both boys and girls chose green.

(a) How many girls were asked altogether?

..... girls [1]

(b) Victor says that yellow is **equally popular** with boys and girls.

Explain why Victor is wrong.

.....  
 ..... [2]

19 Calculate.

$$\frac{8.51 + 7.3}{6.9 - 3.8}$$

..... [1]

20 Write terms in the boxes so that the statements are correct.

(a)  $5a - \square + \square - 4b = 2a - 2b$  [1]

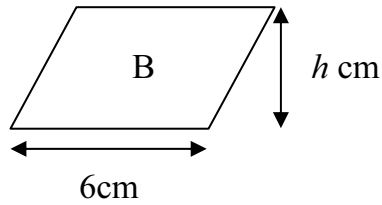
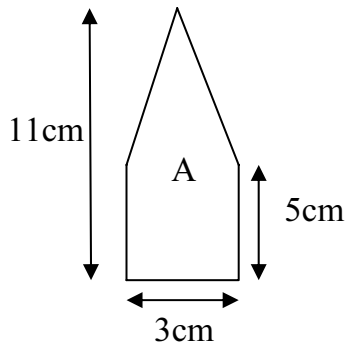
(b)  $\square - 4y + 7x - 3y = 10x - \square$  [1]

21 Tick (✓) the fractions that are equal to a recurring decimal.

$$\frac{2}{9} \quad \frac{5}{8} \quad \frac{4}{11} \quad \frac{7}{20} \quad \frac{14}{33}$$

[1]

22 Look at these shapes.



NOT TO  
SCALE

(a) Work out the area of shape A.

.....  $\text{cm}^2$  [1]

(b) Parallelogram B has the same area as shape A.

Work out the height  $h$  of parallelogram B.

..... cm [1]

23 Cola is sold in cans and bottles.  
A 330 ml can of cola costs 55 cents.  
A 500 ml bottle of cola costs 85 cents.  
Which is better value?

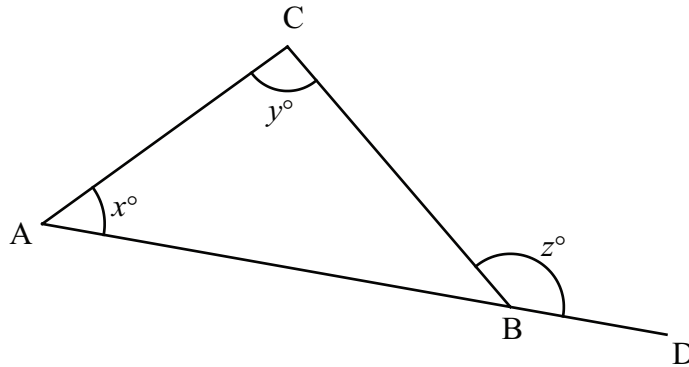
Explain your answer.

Can / Bottle because .....

..... [2]

24 Look at the diagram.

For  
Teacher's  
Use



ABD is a straight line.

Prove that  $z^\circ = x^\circ + y^\circ$

.....

.....

.....

..... [2]

Permission to reproduce items where third-party owned material protected by copyright is included has been sought and cleared where possible. Every reasonable effort has been made by the publisher (UCLES) to trace copyright holders, but if any items requiring clearance have unwittingly been included, the publisher will be pleased to make amends at the earliest possible opportunity.

University of Cambridge International Examinations is part of the Cambridge Assessment Group. Cambridge Assessment is the brand name of University of Cambridge Local Examinations Syndicate (UCLES), which is itself a department of the University of Cambridge.